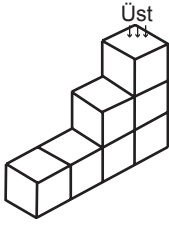
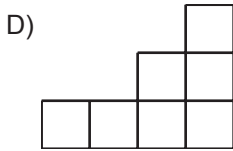
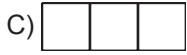



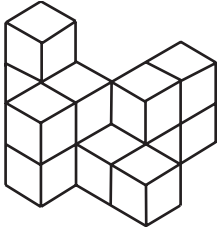
1.



Şekildeki yapının üstten görünümü aşağıdakilerden hangisidir?



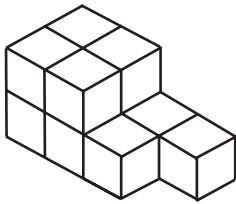
2.



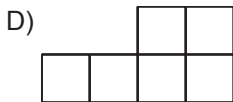
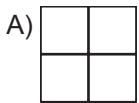
Şekildeki yapıyı oluşturmak için en az kaç adet birim küp kullanılmıştır?

A) 10
C) 12B) 11
D) 13

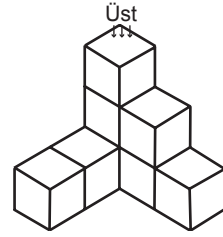
3.



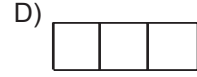
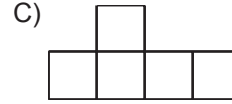
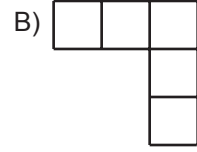
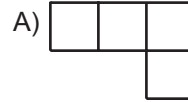
Aşağıdakilerden hangisi şekildeki yapının herhangi bir yönden görünümü değildir?



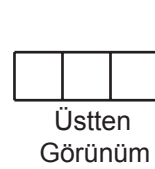
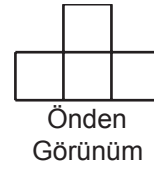
4.



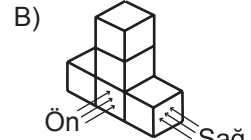
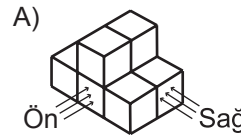
Şekildeki yapının üstten görünümü aşağıdakilerden hangisidir?



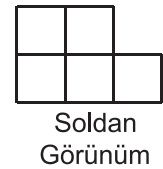
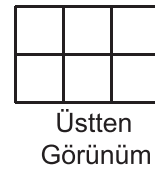
5.



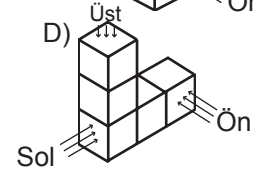
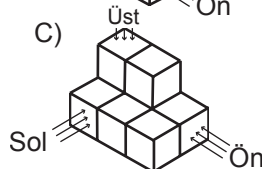
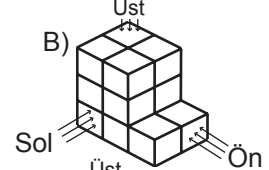
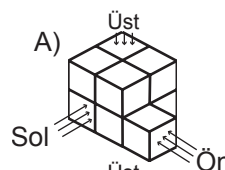
Şekilde bir yapının farklı yönlerden görünümü verilmiştir. Bu yapı aşağıdakilerden hangisi olabilir?

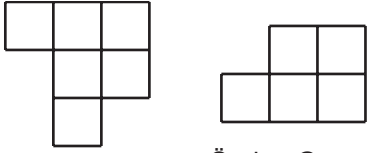


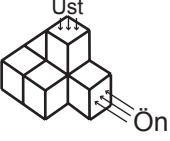
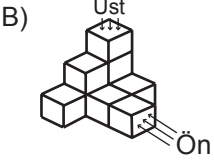
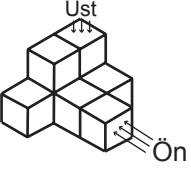
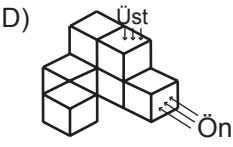
6.



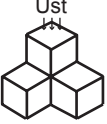
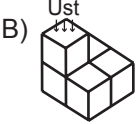
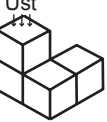
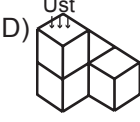
Şekilde bir yapının farklı yönlerden görünümü verilmiştir. Bu yapı aşağıdakilerden hangisi olabilir?

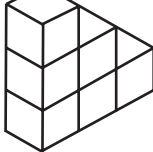


7. 
Üstten Görünüm Önden Görünüm
- Üstten ve önden görünümü verilen yapı aşağıdakilerden hangisidir?


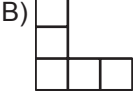
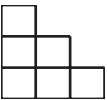

- A)  B) 
- C)  D) 

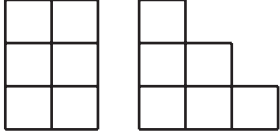
8. Aşağıdaki yapılardan hangisinin üstten görünümü farklıdır?

- A)  B) 
- C)  D) 

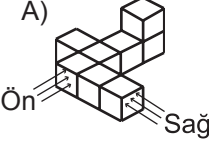
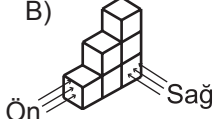
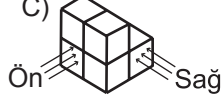
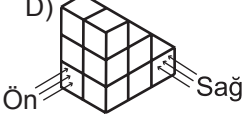
9. 

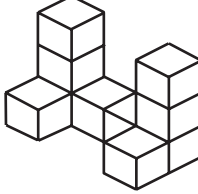
Aşağıdakilerden hangisi verilen yapının herhangi bir yönden görünümü değildir?

- A)  B) 
- C)  D) 

10. 
Önden Görünüm Sağdan Görünüm

Önden ve sağdan görünümü verilen yapı aşağıdakilerden hangisidir?

- A)  B) 
- C)  D) 

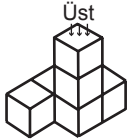
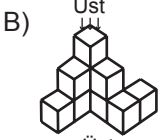
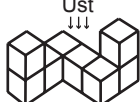
11. 

Yukarıdaki yapıyı oluşturmak için en az kaç adet birim küp kullanılmıştır?

- A) 11 B) 10
C) 9 D) 8

12. 

Üstten görünümü verilen yapı aşağıdakilerden hangisi olamaz?

- A)  B) 
- C)  D) 