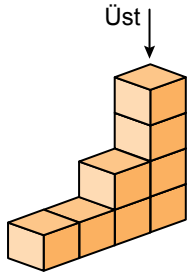
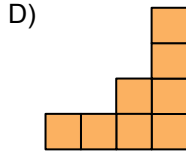
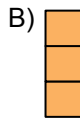


Cisimlerin Farklı Yönlerden Görünümleri

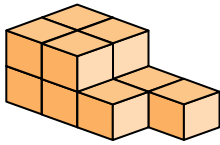
1.



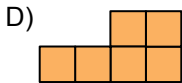
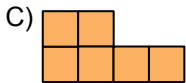
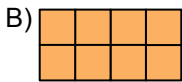
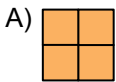
Şekildeki yapının üstten görünümü aşağıdakilerden hangisidir?



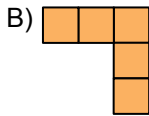
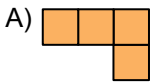
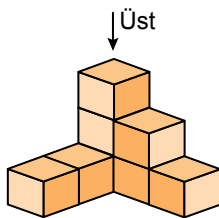
2.



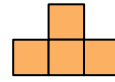
Aşağıdakilerden hangisi şekildeki yapının herhangi bir yönden görünümü değildir?



3. Yandaki yapının üstten görünümü aşağıdakilerden hangisidir?



4.



Önden Görünüm



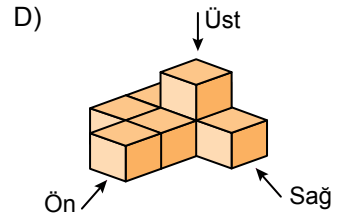
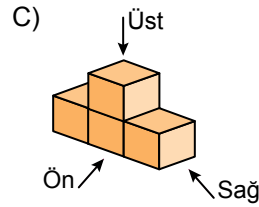
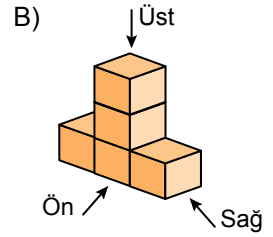
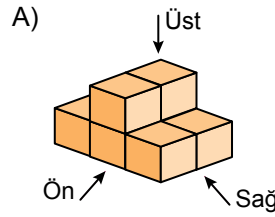
Üstten Görünüm



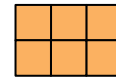
Sağdan Görünüm

Şekilde bir yapının farklı yönlerden görünümü verilmiştir.

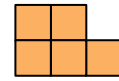
Bu yapı aşağıdakilerden hangisi olabilir?



5.



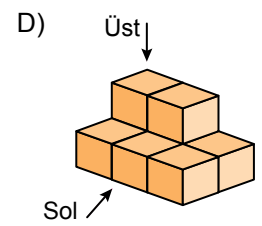
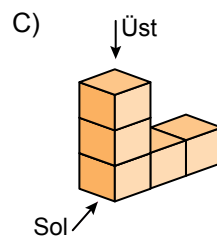
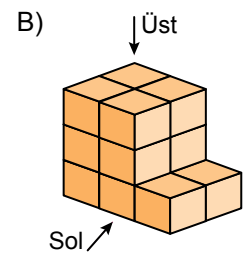
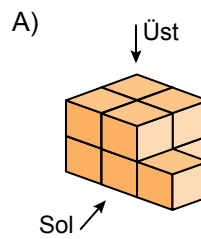
Üstten Görünüm



Soldan Görünüm

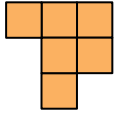
Şekilde bir yapının farklı yönlerden görünümü verilmiştir.

Bu yapı aşağıdakilerden hangisi olabilir?

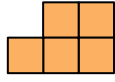


Cisimlerin Farklı Yönlerden Görünümleri

6.

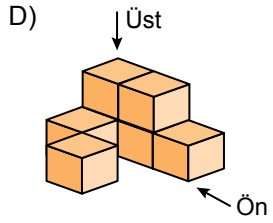
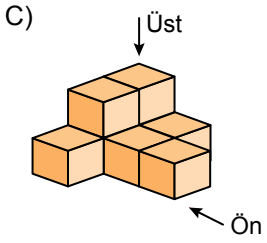
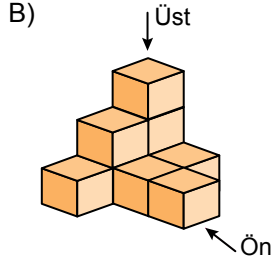
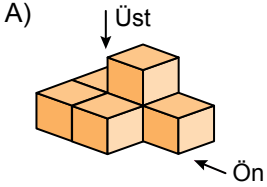


Üstten Görünüm

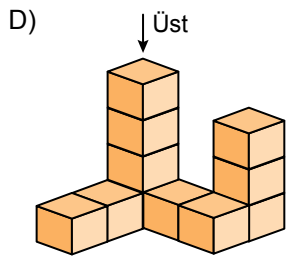
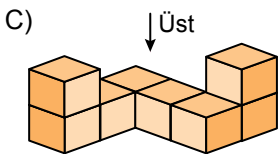
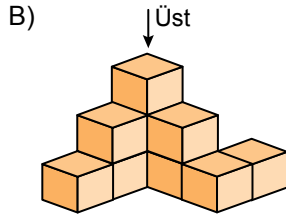
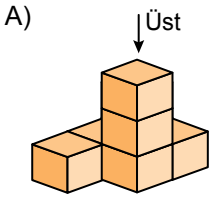
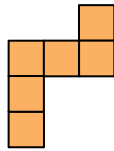


Önden Görünüm

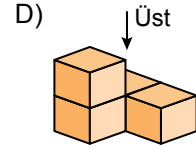
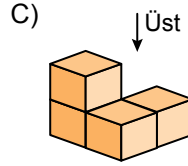
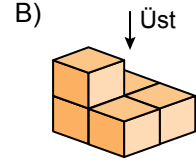
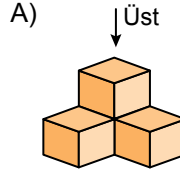
Üstten ve önden görünümü verilen yapı aşağıdakilerden hangisi olabilir?



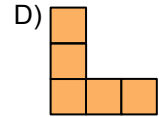
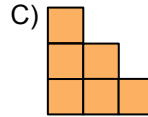
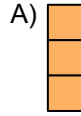
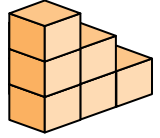
7. Üstten görünümü verilen yapı aşağıdakilerden hangisi ola-  
maz?



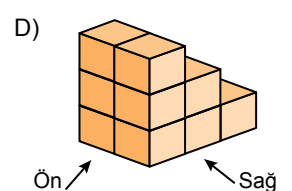
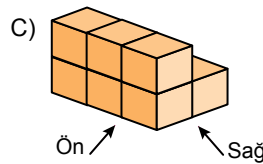
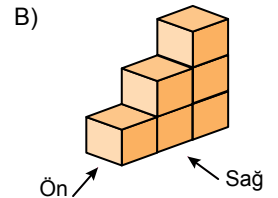
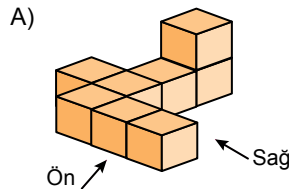
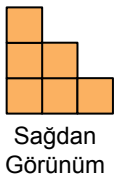
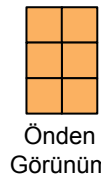
8. Aşağıdaki yapılardan hangisinin üstten görünümü farklıdır?



9. Aşağıdakilerden hangisi yanda verilen yapının herhangi bir yönden görünümü değildir?



10. Önden ve sağdan görünümü verilen yapı aşağıdakilerden hangisi olabilir?



MEB 2018 - 2019 • Ölçme, Değerlendirme ve Sınav Hizmetleri Genel Müdürlüğü

